

# Maths – Grade 4


## Topic: Digital time

Name: \_\_\_\_\_

---


Write the digital time below each clock.

1.




6:55

2.




4:40

3.




9:40

4.




3:30

5.




9:00

6.




11:25

7.




3:45

8.



10:00

9.



10:05